



Cambridge International Examinations
Cambridge International General Certificate of Secondary Education

GEOGRAPHY

0460/41

Paper 4 Alternative to Coursework

May/June 2014


INSERT

1 hour 30 minutes

READ THESE INSTRUCTIONS FIRST

This Insert contains Fig. 3 and Tables 3 and 4 for Question 1, and Figs 6A and 6B and Table 5 for Question 2.

The Insert is **not** required by the Examiner.



The syllabus is approved for use in England, Wales and Northern Ireland as a Cambridge International Level 1/Level 2 Certificate.

This document consists of **7** printed pages and **1** blank page.

Fig. 3 for Question 1

Shopping questionnaire

Date: Time:

Excuse me; I'm a student at The International School. Please could you answer a few questions to help me with my geography fieldwork?

1. How long do you expect to be shopping here?

- 0-15 minutes 16-30 minutes 31-59 minutes
- 1-2 hours More than 2 hours

2. Why have you chosen to shop in the city centre? (You may give more than one answer)

- Near to home Near to work
- Traffic-free area for shopping Lots of parking space
- Wide variety of shops Other reason

3. What are your main concerns about this shopping area?

.....

.....

.....

Thank you very much for your help and time.

Male Female

Age: Under 16 17-30 31-45

46-60 Over 60

Table 3 for Question 1

Answers to Question 2: Why have you chosen to shop in the city centre?

Reason	Number of answers
Near to home	9
Near to work	22
Traffic-free area for shopping	56
Lots of parking space	41
Wide variety of shops	72
Other reason	23
Total	223

Table 4 for Question 1

Answers to Question 3: What are your main concerns about this shopping area?

Concern	Number of answers
Expensive to park	34
Gangs of youths	33
People begging	28
Overcrowded at times	26
Lots of litter and graffiti	25
Noisy	15
Difficult access for disabled people	10
Empty and poor-quality shops	6
Total	177

Fig. 6A for Question 2

Results of students' atmospheric pressure measurements

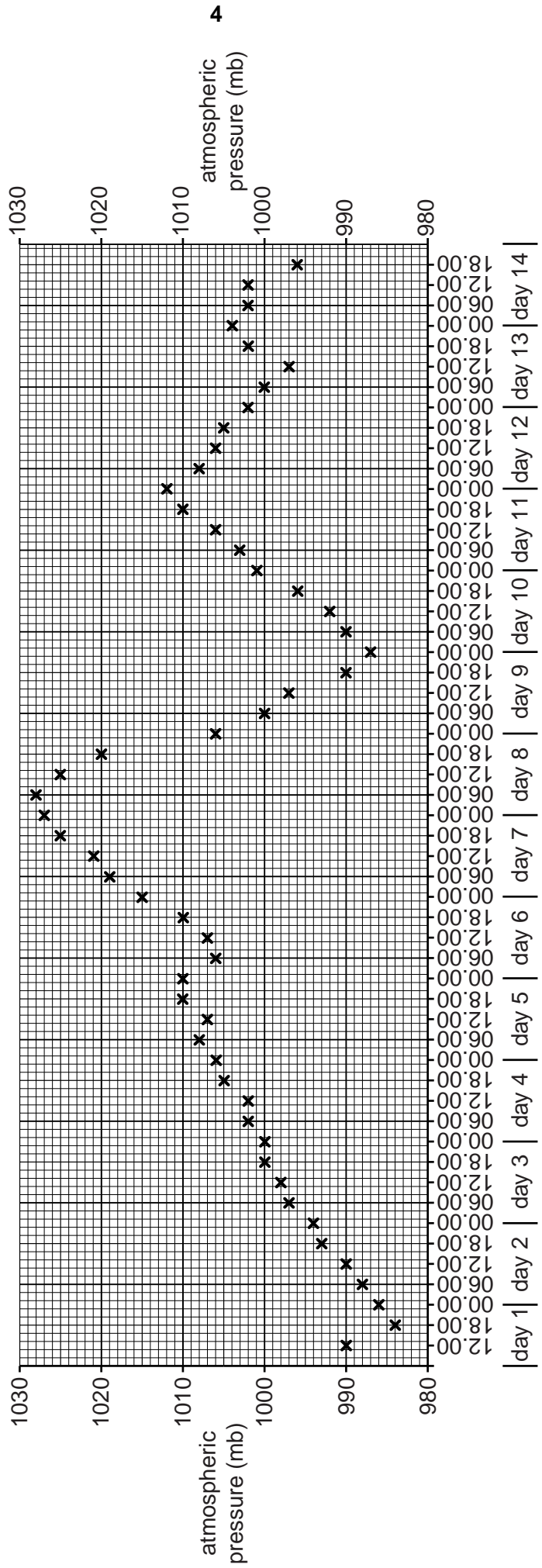


Fig. 6B
Results of students' rainfall measurements

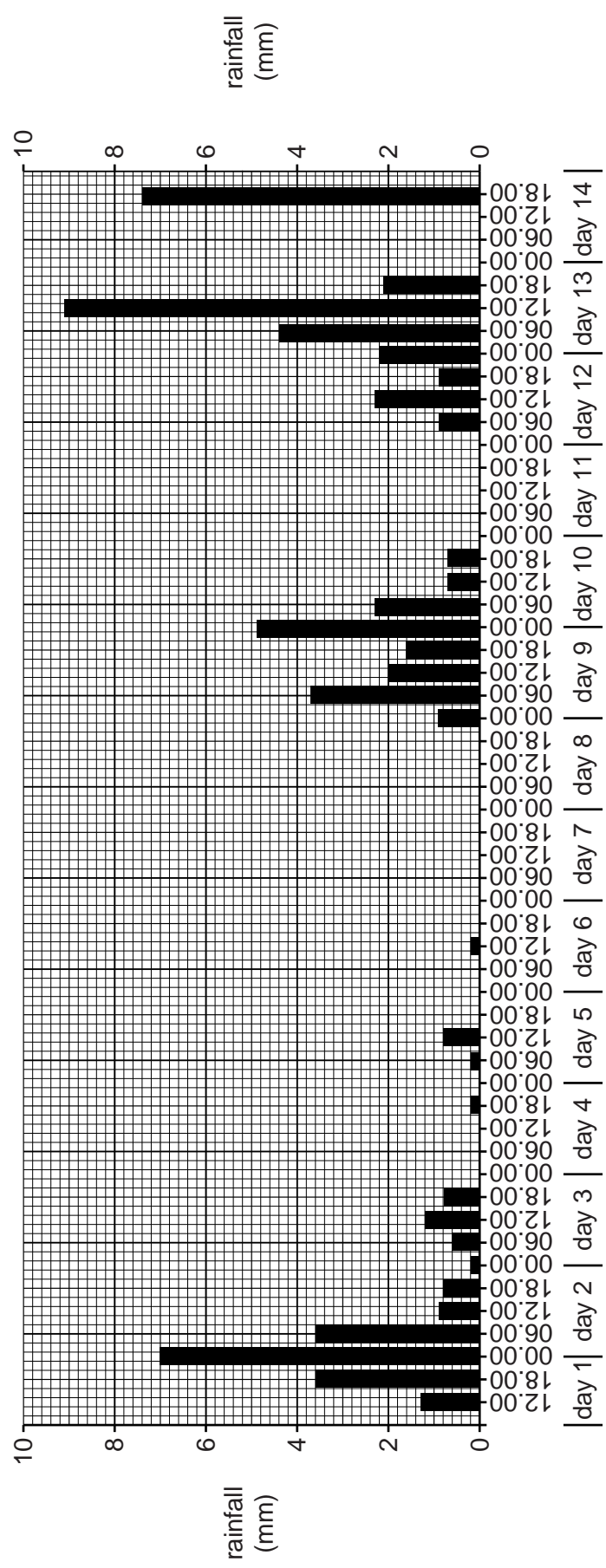


Table 5 for Question 2

Results of measurements

Day	Time of day	Temperature (°C)	Direction from which wind is blowing
1	12.00	10	South
	18.00	8	South
2	0.00	8	South
	6.00	9	South
	12.00	13	South
	18.00	10	South
3	0.00	6	South west
	6.00	8	South west
	12.00	14	South west
	18.00	7	West
4	0.00	5	West
	6.00	8	West
	12.00	11	North west
	18.00	7	North west
5	0.00	5	North west
	6.00	8	North west
	12.00	8	North west
	18.00	5	North west
6	0.00	4	West
	6.00	6	North west
	12.00	10	North
	18.00	6	North
7	0.00	3	North
	6.00	3	North
	12.00	9	North
	18.00	5	North
8	0.00	3	North west
	6.00	3	North west
	12.00	11	West
	18.00	6	South west

9	0.00	4	South west
	6.00	6	West
	12.00	10	West
	18.00	7	South
10	0.00	5	East
	6.00	5	North east
	12.00	8	East
	18.00	5	North west
11	0.00	3	South west
	6.00	7	South west
	12.00	12	East
	18.00	9	East
12	0.00	8	East
	6.00	8	North
	12.00	7	North
	18.00	6	North
13	0.00	5	North
	6.00	5	North
	12.00	8	North east
	18.00	7	North east
14	0.00	6	North east
	6.00	8	North east
	12.00	12	South east
	18.00	9	South east

BLANK PAGE

Copyright Acknowledgements:

Question 1 Fig. 1 © *Wideworld*; Volume 19 Number 1; Phillip Allan; September 2007.

Permission to reproduce items where third-party owned material protected by copyright is included has been sought and cleared where possible. Every reasonable effort has been made by the publisher (UCLES) to trace copyright holders, but if any items requiring clearance have unwittingly been included, the publisher will be pleased to make amends at the earliest possible opportunity.

Cambridge International Examinations is part of the Cambridge Assessment Group. Cambridge Assessment is the brand name of University of Cambridge Local Examinations Syndicate (UCLES), which is itself a department of the University of Cambridge.